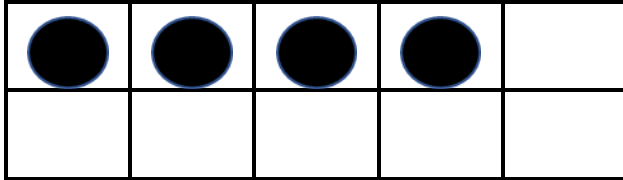


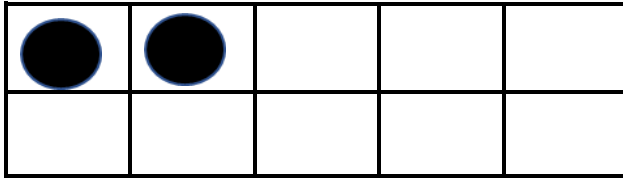
Name: _____



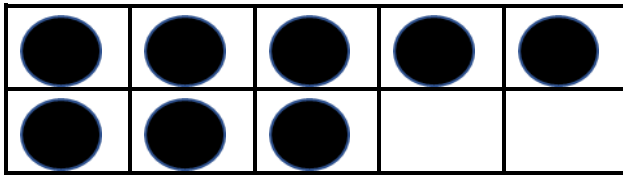
Ways to make Ten.



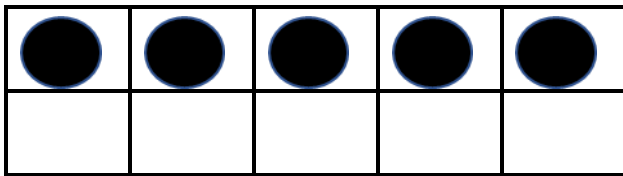
$4 + \underline{\quad} = 10$



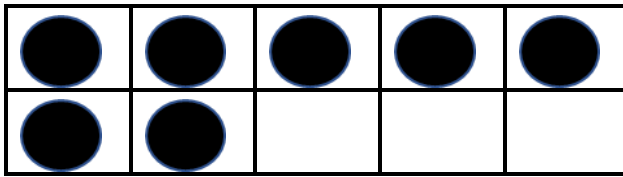
$2 + \underline{\quad} = 10$



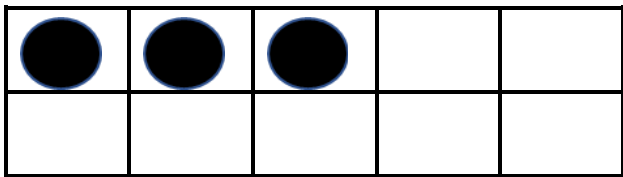
$8 + \underline{\quad} = 10$



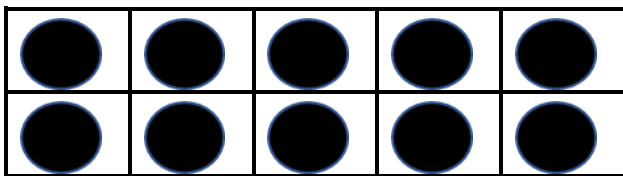
$5 + \underline{\quad} = 10$



$7 + \underline{\quad} = 10$



$3 + \underline{\quad} = 10$



$10 + \underline{\quad} = 10$

Name: _____

Skip Count Path

Color the path and count by ten.

10	20	30	65	64	93	73	29	77
55	95	40	78	43	90	100	110	120
35	25	50	60	70	80	43	85	130

Color the path and count by

5	9	7	30	35	40	45	50	42
10	15	20	25	22	77	43	55	95
7	4	6	8	33	53	86	60	65

Color the path and count by two.

2	4	6	8	19	33	31	24	26	28	30
9	5	9	10	12	14	85	22	23	55	32
7	3	11	19	18	16	18	20	19	67	34



Fishing for Digits

	77	
89		91
	93	
	46	
55		57
	66	
71		
	84	
		98
24		

